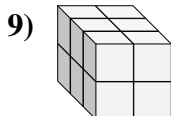
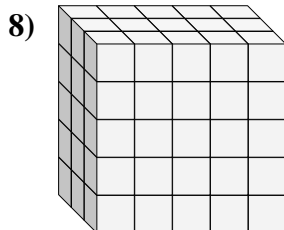
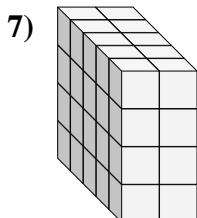
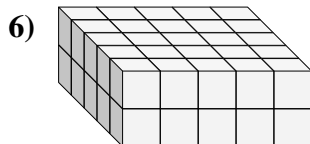
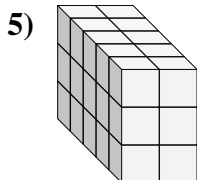
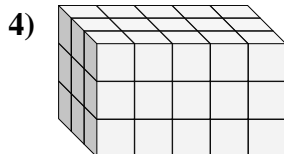
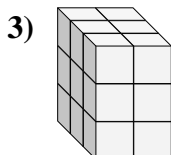
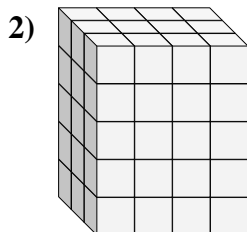
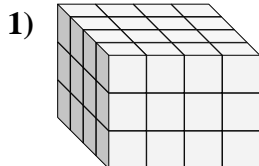
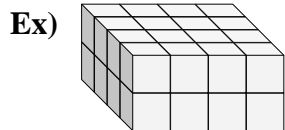




Find the length, width and height of the rectangular prism. Then find the volume.



Answers

D W H V

Ex. 4 4 2 32

1. \_\_\_\_\_

2. \_\_\_\_\_

3. \_\_\_\_\_

4. \_\_\_\_\_

5. \_\_\_\_\_

6. \_\_\_\_\_

7. \_\_\_\_\_

8. \_\_\_\_\_

9. \_\_\_\_\_